

Exam Technique 1.

BUG your exam questions.

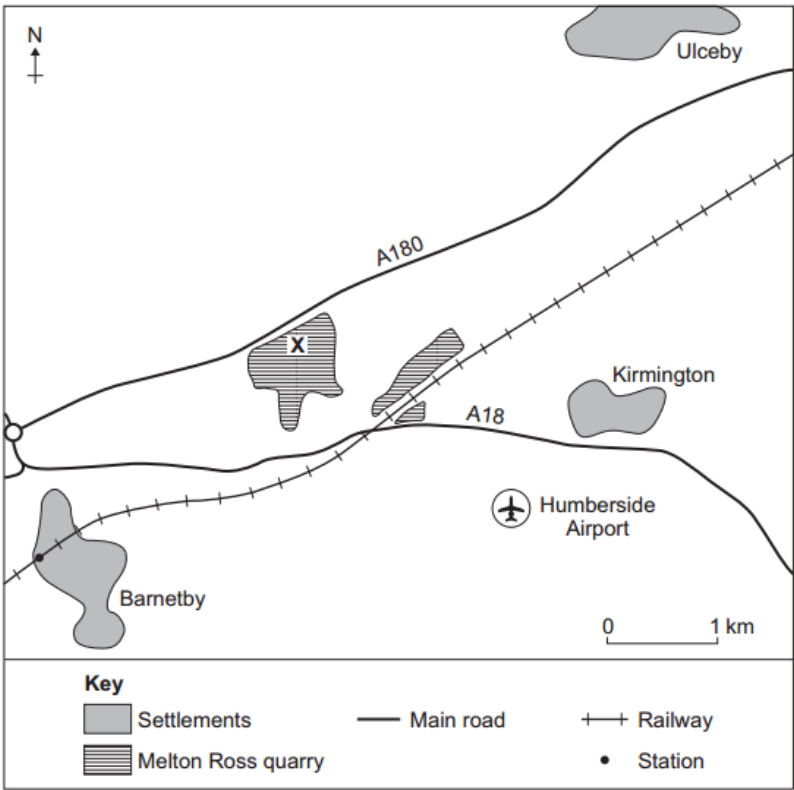
Your teachers will be looking to see that you have done this in **all** of your assessments next week.



BUG your exam questions.

2 (d) Study **Figure 6**, a sketch map showing the location of Melton Ross quarry.

Figure 6



2 (d) (i) Complete the sentences below to describe the location of Melton Ross quarry.

[3 marks]

Melton Ross quarry is two km of Kirmington.

Barnetby station is km south west of location X at the quarry.

The quarry is north of the main road

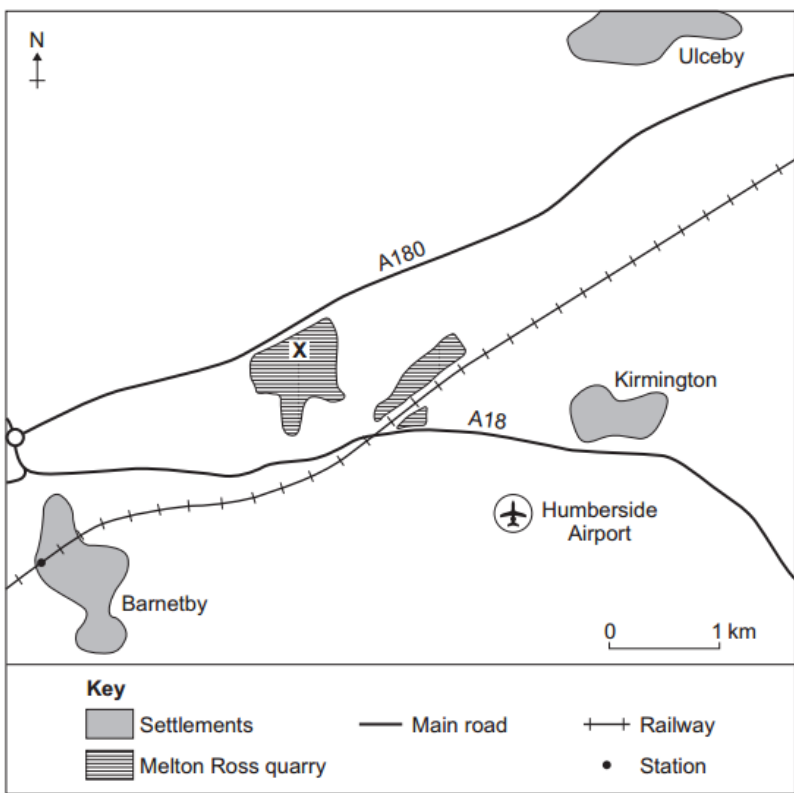
BUG your exam questions.

BOX the **COMMAND** words.
What is the question asking you to do?

U
G

2 (d) Study Figure 6, a sketch map showing the location of Melton Ross quarry.

Figure 6



2 (d) (i) Complete the sentences below to describe the location of Melton Ross quarry. [3 marks]

Melton Ross quarry is two km of Kirmington.

Barnetby station is km south west of location X at the quarry.

The quarry is north of the main road

BUG your exam questions.

BOX the **COMMAND** words.
What is the question asking you to do?

U
G

2 (d) Study **Figure 6**, a sketch map showing the location of Melton Ross quarry.

Figure 6

Key

Settlements	Main road	Railway
Melton Ross quarry		Station

2 (d) Complete the sentences below to describe the location of Melton Ross quarry. [3 marks]

Melton Ross quarry is two km of Kirmington.

Barnetby station is km south west of location X at the quarry.

The quarry is north of the main road

BUG your exam questions.

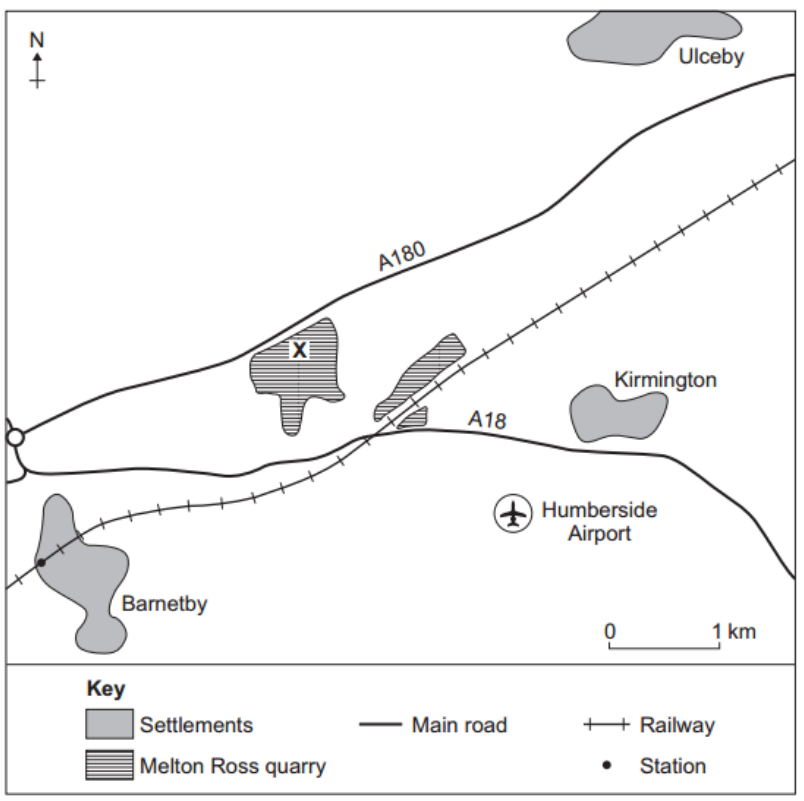
BOX the **COMMAND** words.
What is the question asking you to do?

UNDERLINE the **KEY** words.
What do you have to include?
How many marks are available?

G

2 (d) Study Figure 6, a sketch map showing the location of Melton Ross quarry.

Figure 6



2 (d) (i) Complete the sentences below to describe the location of Melton Ross quarry. [3 marks]

Melton Ross quarry is two km of Kirmington.

Barnetby station is km south west of location X at the quarry.

The quarry is north of the main road

BUG your exam questions.

BOX the **COMMAND** words.
What is the question asking you to do?

UNDERLINE the **KEY** words.
What do you have to include?
How many marks are available?

Answer the questions

2 (d) Study **Figure 6**, a sketch map showing the location of Melton Ross quarry.

Figure 6

Key

Settlements	Main road	Railway
Melton Ross quarry		Station

2 (d) (i) **Complete the sentences** below to **describe the location** of Melton Ross quarry. **[3 marks]**

Melton Ross quarry is two km *west* of Kirmington.

Barnetby station is *3* km south west of location X at the quarry.

The quarry is north of the main road *A18*

G

BUG your exam questions.

BOX the **COMMAND** words.
What is the question asking you to do?

UNDERLINE the **KEY** words.
What do you have to include?
How many marks are available?

Answer the questions

GO BACK and **check** you have done the **boxed** word and included the **underlined** words in your answer.

2 (d) Study Figure 6, a sketch map showing the location of Melton Ross quarry.

Figure 6

Key

Settlements	Main road	Railway
Melton Ross quarry		Station

2 (d) (i) Complete the sentences below to describe the location of Melton Ross quarry. [3 marks]

Melton Ross quarry is two km west of Kirmington.

Barnetby station is 3 km south west of location X at the quarry.

The quarry is north of the main road A18

BUG your exam questions.

WHAT WOULD YOU BUG ON HERE?

BOX the **COMMAND** words.

What is the question asking you to do?

UNDERLINE the **KEY** words.

What do you have to include?

How many marks are available?

Answer the question

GO BACK and **check**

Example English, French or Spanish question:

Context: **Home and environment**

Task: **You have been asked to write a description of your town for an international youth Internet forum, comparing life in different parts of the world.**

Include details of the following:

General characteristics

1. Geographical location
2. Size / population
1. Character

BUG your exam questions.

WHAT WOULD YOU BUG ON HERE?

BOX the **COMMAND** words.
What is the question asking you to do?

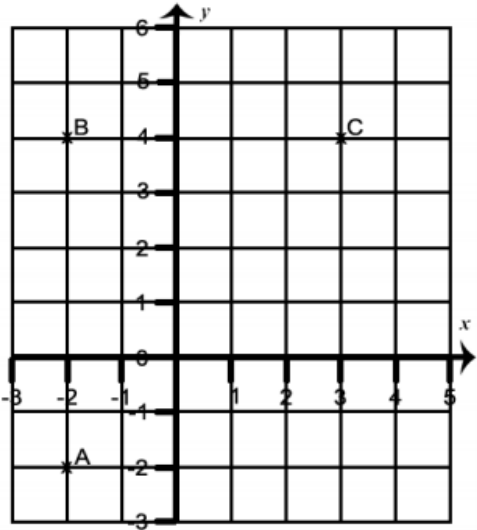
UNDERLINE the **KEY** words.
What do you have to include?
How many marks are available?

Answer the question

GO BACK and check

Example maths questions:

3.



(a) Write down the coordinates of the points A, B and C.
A (.....,) B (.....,) C (.....,)
(3 marks)

(b) Write down the coordinates of the point D, which makes a rectangle with A, B and C.
D (.....,)
(2 marks)

4. (a) Circle the fractions in the list which are equivalent to $\frac{3}{4}$
 $\frac{33}{44}$ $\frac{4}{7}$ $\frac{9}{12}$ $\frac{13}{14}$ $\frac{30}{40}$ $\frac{4}{5}$ $\frac{21}{28}$
(2 marks)

BUG your exam questions.

WHAT WOULD YOU BUG ON HERE?

BOX the **COMMAND** words.
What is the question asking you to do?

UNDERLINE the **KEY** words.
What do you have to include?
How many marks are available?

Answer the question

GO BACK and **check**

Example RE questions:

Question 2 Religion, Sport and Leisure

Look at the photographs. They show football fans supporting their teams.



0 6

Explain why some people say sport has become a religion.

[5 marks]

0 7

'Natural ability is a gift from God.'

What do you think? Explain your opinion.

[3 marks]

0 8

Give **one** benefit of leisure time.

[1 mark]

Many schools and universities have said their students' results improved when they used this technique in ALL their exams.

'BUG' helps you to answer questions properly / fully.

Exam Technique 1.

BUG your exam questions.

Your teachers will be looking to see that you have done this in **all** of your assessments next week.

